



INDIAN SCHOOL NIZWA - WORKSHEET

MATHEMATICS CH-9 DATA HANDLING


Name: _____


Date: _____

Class: I Sec: ____


I. The picture shows how many glasses of milk the children drink in a week.


Use the pictures to answer the questions.




Anil drinks  in a week.

Babu drinks  in a week.

Mary drinks  in a week.

Roja drinks  in a week.

Roja drinks more  than Mary.



II. Count and write.


1.  _____

2.  _____

3.  _____

4.  _____

III. Roja went to the supermarket. She bought some fruits.



Count and write how many of each kind she bought.

a. Banana _____ c. Pear _____ e. Pine apple _____

b. Strawberry _____ d. Apple _____